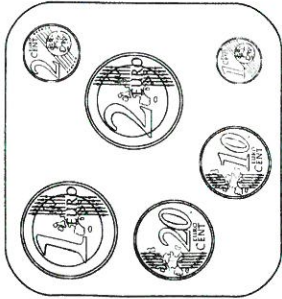
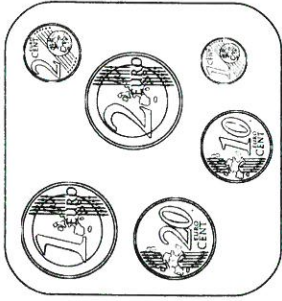


# La monnaie

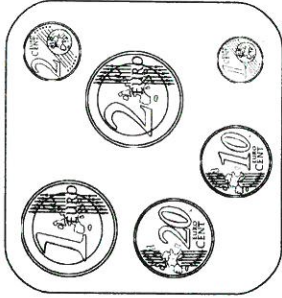
Colorie les pièces pour avoir la somme indiquée.



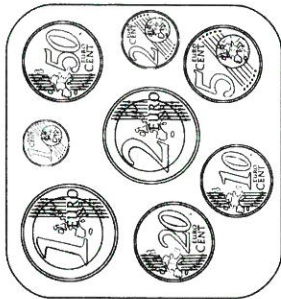
1 € et 2 c



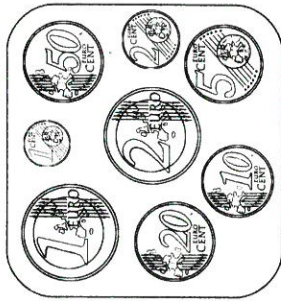
2 € et 10 c



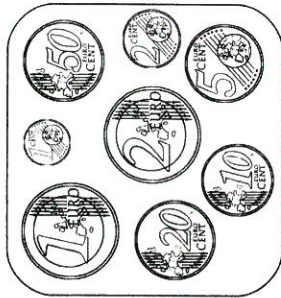
1 € et 20 c



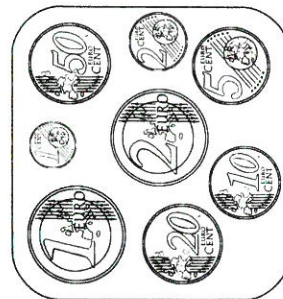
2 € et 50 c



1 € et 5 c



2 € et 1 c



3 € et 12 c

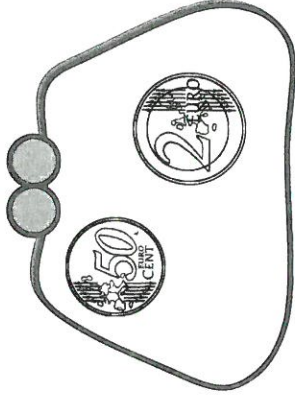


2 € et 15 c

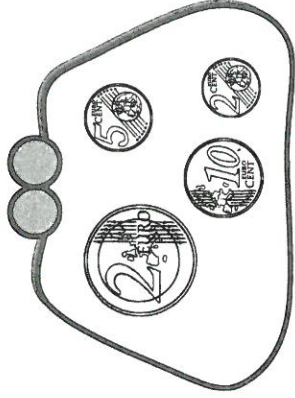


1 € et 11 c

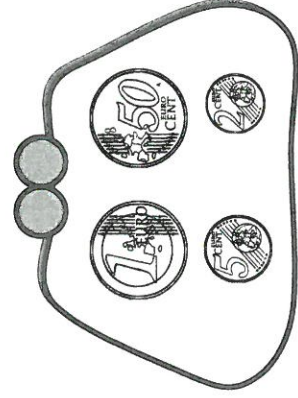
Indique la somme contenue dans chaque porte-monnaie.



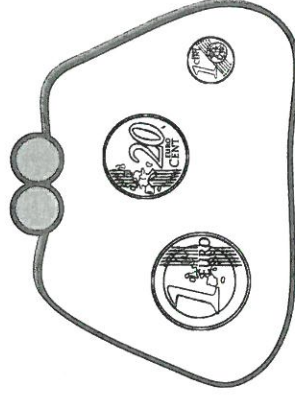
€ \_\_\_\_\_



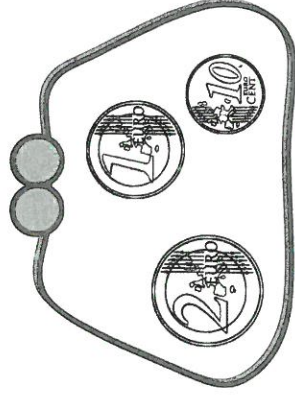
€ \_\_\_\_\_



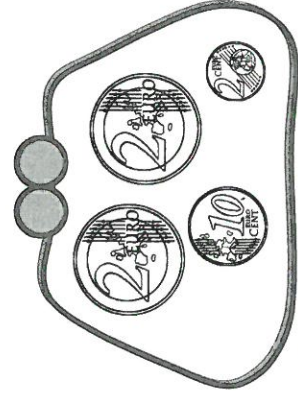
€ \_\_\_\_\_



€ \_\_\_\_\_




€ \_\_\_\_\_



€ \_\_\_\_\_

**2** Entoure les pièces et billets que tu dois donner pour payer ces jouets.



3 € 25

3 € 52

2 € 30

2 € 15

1 € 11

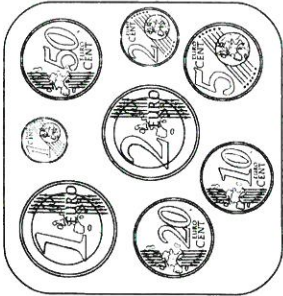
0 € 87

2 € 21

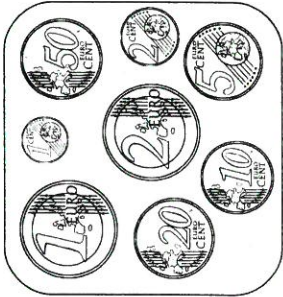
1 € 05

Colorie les pièces qu'il te faut pour acheter chaque bonbon.

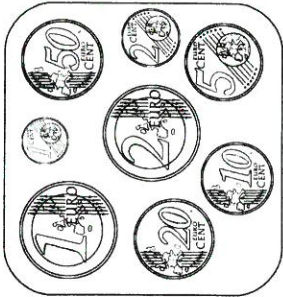
Colorie les pièces pour avoir la somme indiquée.



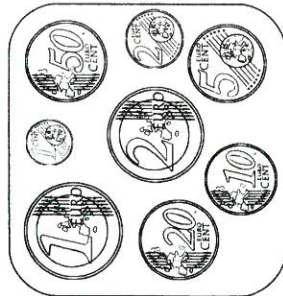
2 € et 25 c



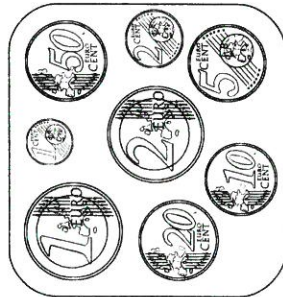
1 € et 23 c



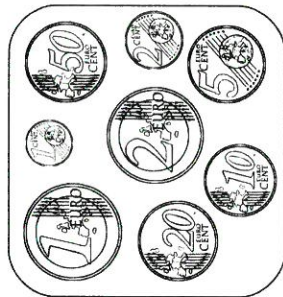
2 € et 27 c



3 € et 26 c



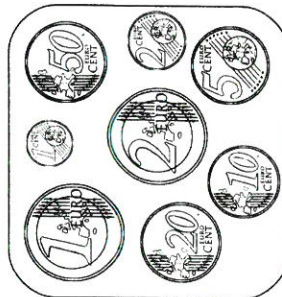
1 € et 51 c



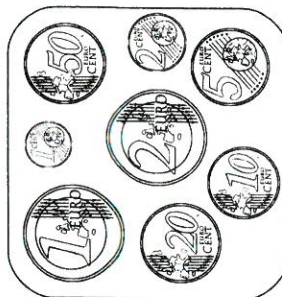
2 € et 30 c



2 € et 3 c

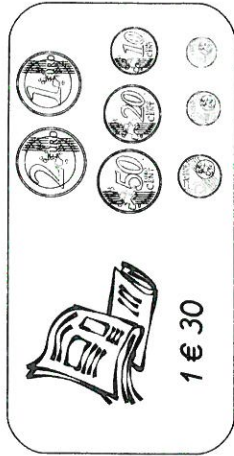

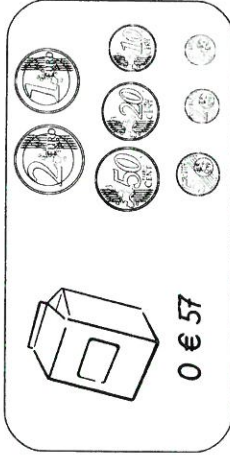


2 € et 60 c



1 € et 7 c

Colorie les pièces qu'il te faut pour acheter chaque bonbon.



## La monnaie

Les centimes (c)

1c

2c

5c

10c

20c

50c

Les euros (€)

1€

2€

5€

10€

20€



50€

100€




Les pièces et les billets sont rangés de la plus petite valeur à la plus grande.



**1** Dessine le moins de pièces et de billets possible pour acheter ces objets.

 16 €	
 32 €	

**2** Dessine le moins de pièces et de billets possible pour acheter ces objets.

 15 € 50 c	
 40 € 20 c	
 50 € 60 c	